


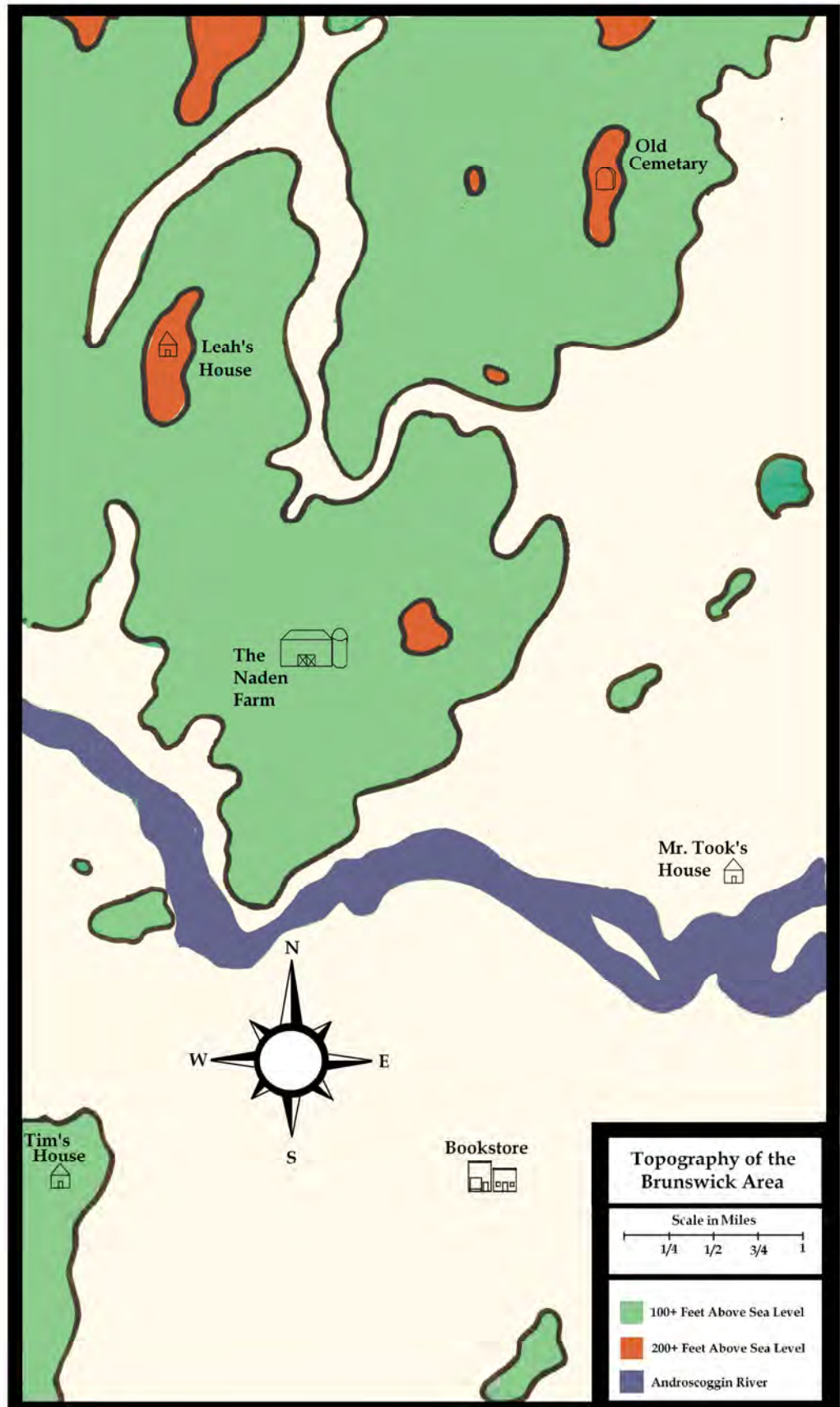
## Using a Scale and Compass Rose Activity: Brunswick



Name: \_\_\_\_\_


Circle the correct answer:

- Whose house is at a higher elevation?
  - Leah's
  - Tim's
  - Mr. Took's
- If Tim wanted to buy a book at the bookstore, what direction would he need to walk?
  - North
  - South
  - East
  - West
- If Farmer Naden wanted to walk to the Androscoggin River, how far would he have to walk?
  - $\frac{1}{4}$  of a mile
  - 1 mile
  - 3 miles
  - $3\frac{1}{2}$  miles
- If Mr. Took wanted to walk to the Old Cemetery, would he have to walk downhill or uphill on the way there?
  - Downhill
  - Uphill
- Leah needs to walk 4 miles southeast to get to her piano lessons. Who is her piano teacher?
  - Mr. Took
  - Farmer Naden
  - Tim



# ANSWERS

## Using a Scale and Compass Rose Activity: Brunswick



Name: \_\_\_\_\_

Circle the correct answer:

- Whose House is at a higher elevation?  
**a. Leah's**  
b. Tim's  
c. Mr. Took's
- If Tim wanted to buy a book at the bookstore, what direction would he need to walk?  
a. North  
b. South  
**c. East**  
d. West
- If Farmer Naden wanted to walk to the Androscoggin River, how far would he have to walk?  
a.  $\frac{1}{4}$  of a mile  
**b. 1 mile**  
c. 3 miles  
d.  $3\frac{1}{2}$  miles
- If Mr. Took wanted to walk to the Old Cemetery, would he have to walk downhill or uphill on the way there?  
a. Downhill  
**b. Uphill**
- Leah needs to walk 4 miles Southeast to get to her piano lessons. Who is her piano teacher?  
**a. Mr. Took**  
b. Farmer Naden  
c. Tim

